



Where Have All The  
Shamrocks Gone?

©TeachWithMe.com



Where Have All The  
Shamrocks Gone?

©TeachWithMe.com




There were 5 shamrocks.

1 disappeared. That left 4.

$$5 - 1 = 4$$

$$\begin{array}{r} 5 \\ - 1 \\ \hline \end{array}$$




There were 5 shamrocks.

1 disappeared. That left 4.

$$5 - 1 = 4$$

$$\begin{array}{r} 5 \\ - 1 \\ \hline \end{array}$$




There were 4 shamrocks.

1 disappeared. That left 3.

4

$$4 - 1 = 3$$

1




There were 4 shamrocks.

1 disappeared. That left 3.

4

$$4 - 1 = 3$$


1



There were 3 shamrocks.  
1 disappeared. That left 2.

$$3 - 1 = 2$$


$$\begin{array}{r} 3 \\ - 1 \\ \hline \end{array}$$



There were 3 shamrocks.  
1 disappeared. That left 2.

$$3 - 1 = 2$$


$$\begin{array}{r} 3 \\ - 1 \\ \hline \end{array}$$



There were 2 shamrocks.  
1 disappeared. That left 1.

$$\begin{array}{r} 2 \\ - 1 \\ \hline \end{array}$$

$$2 - 1 = 1$$





There were 2 shamrocks.  
1 disappeared. That left 1.

$$\begin{array}{r} 2 \\ - 1 \\ \hline \end{array}$$


$$2 - 1 = 1$$



There was 1 shamrock.  
It disappeared. That left 0.  
Where have all the shamrocks gone?



There was 1 shamrock.  
It disappeared. That left 0.  
Where have all the shamrocks gone?





I bet the leprechaun knows!



I bet the leprechaun knows!