


My Pumpkin
Investigation

By:



My pumpkin is (Trace and write. Color the pumpkin.)


orange

If my pumpkin was cut in half it would look like this.

(Color 1/2 of your pumpkin.)


half

1/2



I think my pumpkin will have / will not have seeds
inside. (Circle your answer.)

My guess was correct / incorrect. (Circle your answer. Draw what
you found inside your pumpkin.)



I think my pumpkin is _____ blocks tall.

My pumpkin is _____ blocks tall.

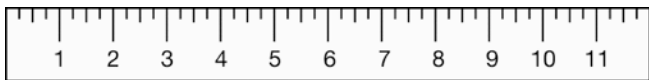



(Color that many blocks.)

My guess was _____

right _____

more _____

less _____




I used a ruler to see how many inches tall my pumpkin was.

I measured its height. height


My pumpkin is _____ inches tall.

A _____ is taller
than my pumpkin.

A _____ is shorter
than my pumpkin.



Did you find anything that was the same height as your
pumpkin? Yes / No (Circle your answer. If yes, write it down below).



I think my pumpkin will weigh _____ pounds.

I used a scale to weigh my pumpkin.

scale

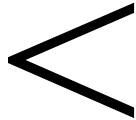
My pumpkin weighs _____ pounds.

My guess was

right

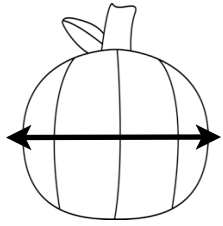
more

less



A _____ weighs more than my pumpkin.

A _____ weighs less than my pumpkin.



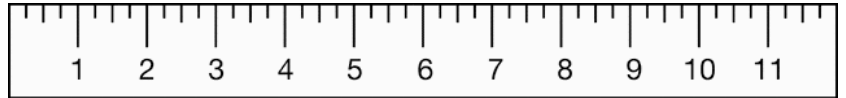
I think my pumpkin is _____ inches wide.

I used a ruler to measure how wide my pumpkin is

ruler

My pumpkin is _____ inches wide.


My guess was



right

more

less




I found a

that is wider than my pumpkin.

I found a

that is not as wide as my pumpkin.



Did you find anything that was the same width as your pumpkin?

Yes / No (Circle your answer. If yes, write down what you found.)


I think my pumpkin is _____ inches around.

This is called circumference.

circumference

I used a measuring tape to find out.

measuring tape



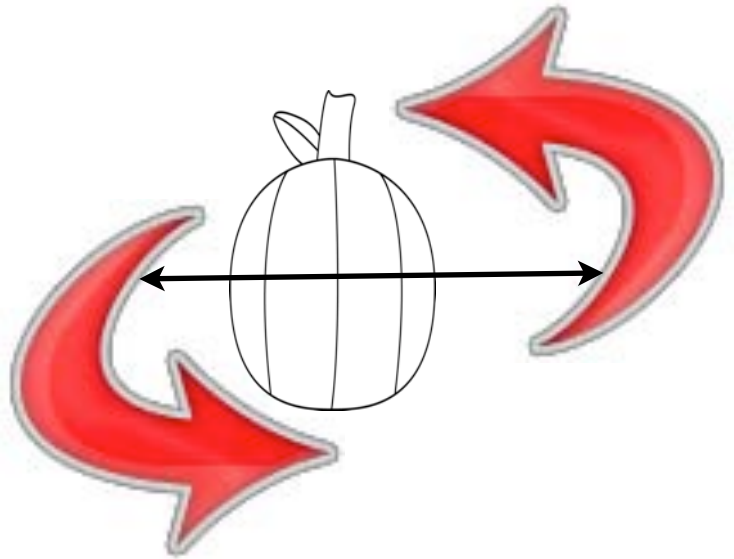
My pumpkin is _____ inches around.

My guess was

right

more

less



I found a _____ that had a bigger circumference than my pumpkin.

I found a _____ that had a smaller circumference than my pumpkin.

Choose a partner.

Lie on the floor and have them measure how many pumpkins tall you are.

I think I will be _____ pumpkins tall.


I am _____ pumpkins tall.

My guess was

right _____

more _____


less _____




I measured my friend _____.

They are taller / shorter than me. (Circle one and then fill in the next answer.)

They are _____ pumpkin(s) taller than me. (Color that many pumpkins.)



They are _____ pumpkin(s) shorter than me. (Color that many pumpkins.)



They are the same height as me.

I tasted pumpkin seeds. They tasted

salty

good

bad

Something else that tastes salty is

Something else that tastes good is

Something else that tastes bad is

I like pumpkin seeds. I do not like pumpkin seeds. (Circle your answer.)

This is a picture of my pumpkin.