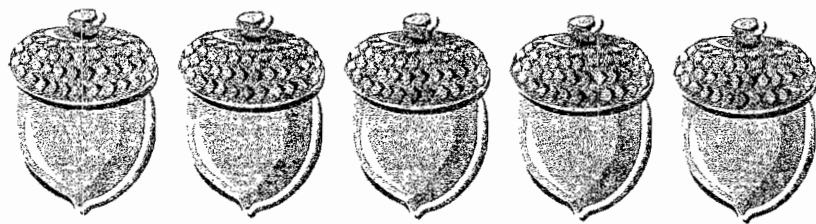




WHERE HAVE ALL
THE ACORNS GONE?



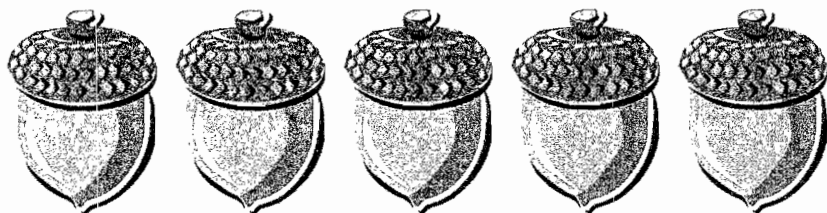
WHERE HAVE ALL
THE ACORNS GONE?



There were 5 acorns.
1 disappeared. That left 4.

$$\begin{array}{r} 5 \\ - 1 \\ \hline \end{array}$$


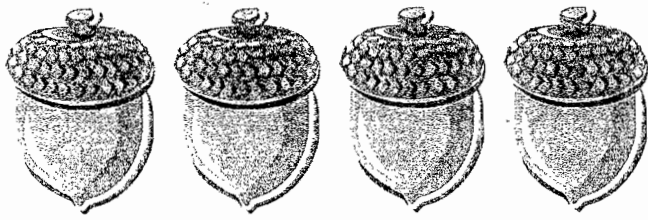
$$5 - 1 = 4$$



There were 5 acorns.
1 disappeared. That left 4.

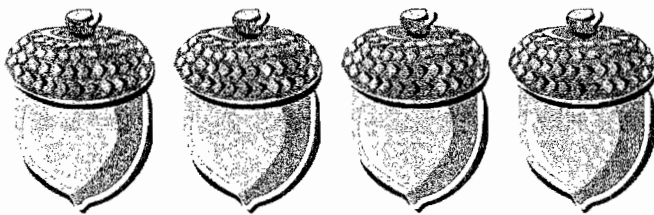

$$\begin{array}{r} 5 \\ - 1 \\ \hline \end{array}$$

$$5 - 1 = 4$$




There were 4 acorns.
1 disappeared. That left 3. —

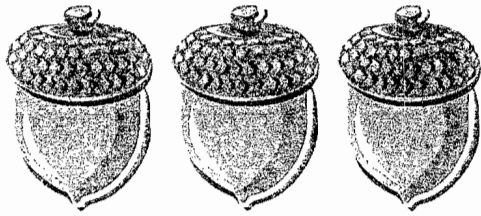
$$4 - 1 = 3$$



There were 4 acorns.
1 disappeared. That left 3. —

$$4 - 1 = 3$$






There were 3 acorns.
1 disappeared. That left 2.

$$\begin{array}{r} 3 \\ - 1 \\ \hline \end{array}$$

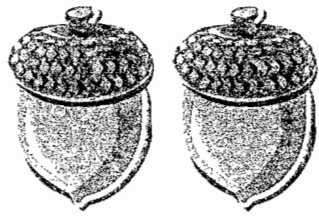
$$3 - 1 = 2$$



There were 3 acorns.
1 disappeared. That left 2.

$$\begin{array}{r} 3 \\ - 1 \\ \hline \end{array}$$

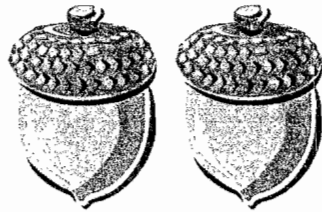
$$3 - 1 = 2$$



There were 2 acorns.
1 disappeared. That left 1.

$$\begin{array}{r} 2 \\ - 1 \\ \hline \end{array}$$


$$2 - 1 = 1$$






There were 2 acorns.
1 disappeared. That left 1.

$$\begin{array}{r} 2 \\ - 1 \\ \hline \end{array}$$



$$2 - 1 = 1$$



There was 1 acorn.
It disappeared. That left 0.
Where have all the acorns gone?



There was 1 acorn.
It disappeared. That left 0.
Where have all the acorns gone?



Winter's almost here!



Ask the squirrel.

Winter's almost here!



Ask the squirrel.